

UNIVERSITY OF CALCUTTA

CITY COLLEGE CENTRE

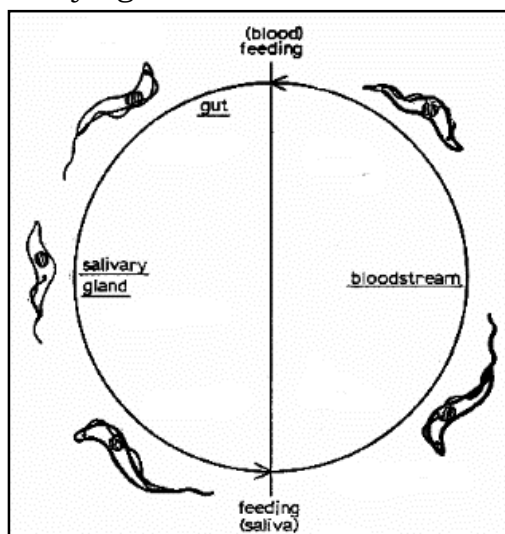
5th SEMESTER ZOOLOGY – HONOURS – PRACTICAL EXAMINATION
(ONLINE)

Full Marks: 30

Time – 2 hour

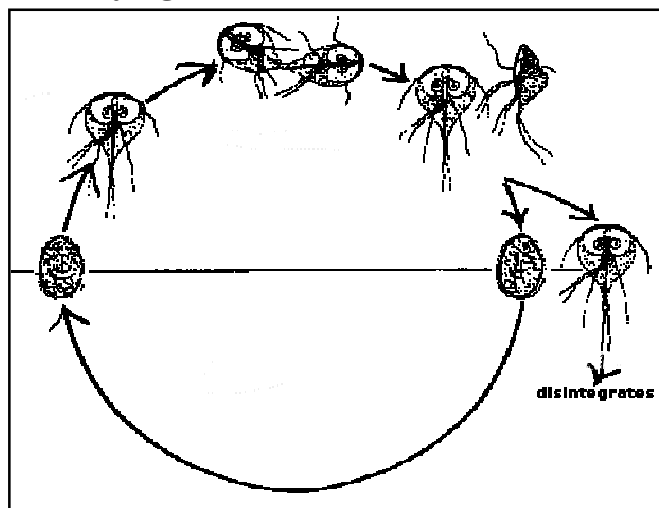
PAPER – ZOOA-DSE(A)-5-1-P

1. Identify **specimen A** with scientific name, from the given diagram of life cycle stages. Write four identifying characteristic features. 1+4=5



Specimen-A

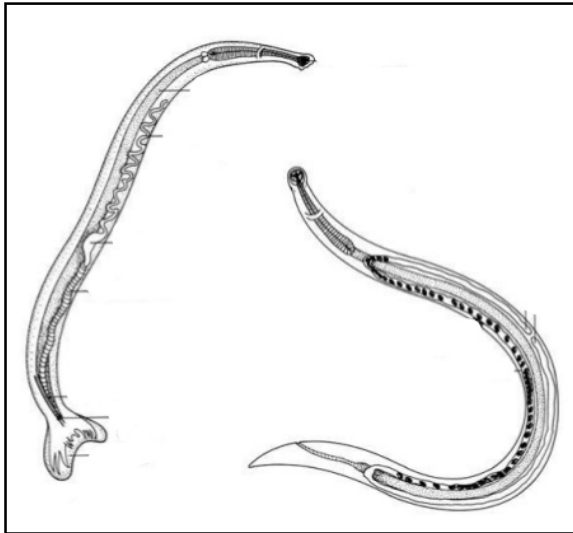
2. Identify **specimen B** with scientific name, from the given diagram of life cycle stages. Write four identifying characteristic features. 1+4=5



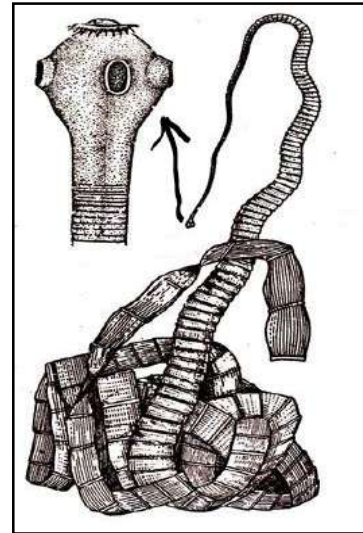
Specimen-B

3. Identify **specimen C & D** with scientific names, from the given diagrams. Write four identifying characteristic features for each of the specimen.

(1+1+3= 5) × 2 = 10



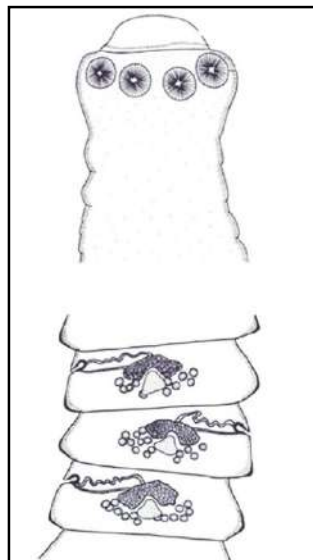
Specimen- C



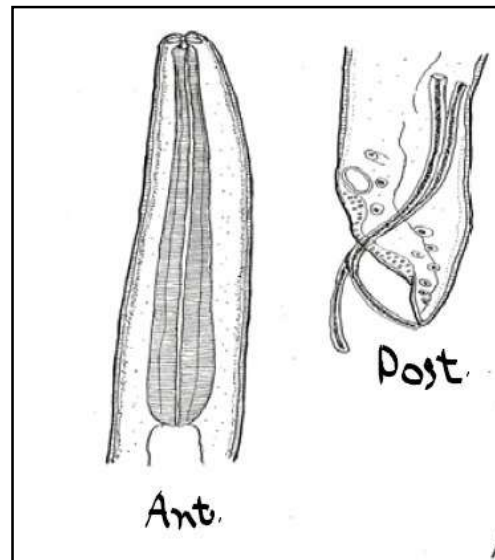
Specimen- D

4. Identify **specimen E & F** with the scientific names, from the given diagrams. Write the names of the respective host animals of the given specimens. Write three identifying characteristic features for each of the given specimen.

(1+1+3= 5) × 2 = 10



Specimen- E



Specimen-F